








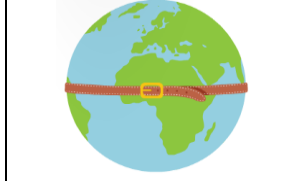


# En må ut

Sett et kryss over bildet dere mener skal ut. Vær forberedt på å forklare valget dere gjør.


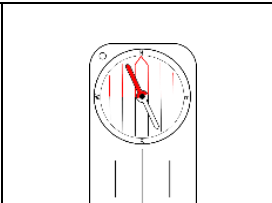

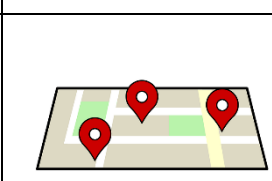
1

 SØR-AMERIKA	 OSEANIA
 ASIA	 JORDA

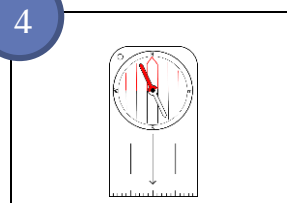
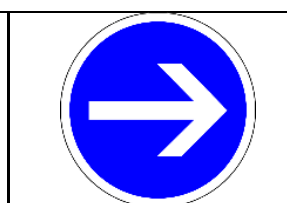
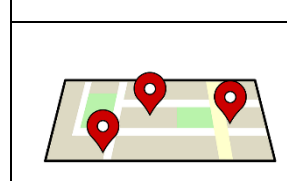

2

 PAPEGØYE	 EKVATOR
 ISBJØRN	 REGNSKOG

3





 GLOBUS	 KOMPASS
 ATLAS	 KART

4





 KOMPASS	 PIL MOT HØYRE
 KART	 KLOKKE







5

 <p>NORGE</p>	 <p>AFRIKA</p>
 <p>ASIA</p>	 <p>SØR-AMERIKA</p>





6

 <p>BLÅHVAL</p>	 <p>REINSDYR</p>
 <p>ISBJØRN</p>	 <p>PINGVIN</p>





7

 <p>EUROPA</p>	 <p>NORD-AMERIKA</p>
 <p>ASIA</p>	 <p>SØR-AMERIKA</p>

8

 <p>DET INDISKE HAV</p>	 <p>STILLEHAVET</p>
 <p>ATLANTERHAVET</p>	 <p>SØR-AMERIKA</p>

9

 <p>SØR</p>	 <p>ØST</p>
 <p>VEST</p>	 <p>EKVATOR</p>

10

 <p>GLOBUS</p>	 <p>VERDENSKART</p>
 <p>NORD, SØR, ØST OG VEST</p>	 <p>ATLAS</p>